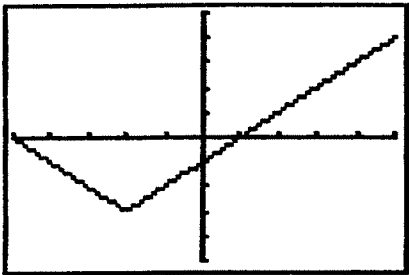


Review Problems for
Domain/Range &
Function/Nonfunction

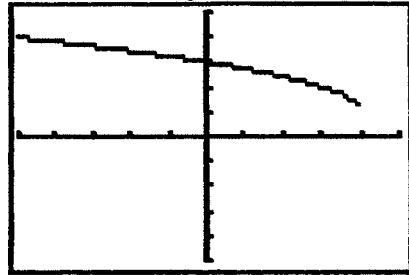
Find the domain and range of the following graphs, and circle whether they are functions or not. Unless stated otherwise, the scale is 1 on the x and y axes.



Domain _____

Range _____

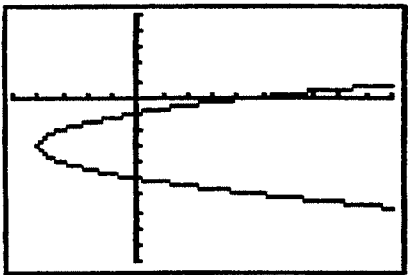
Function: Yes or No



Domain _____

Range _____

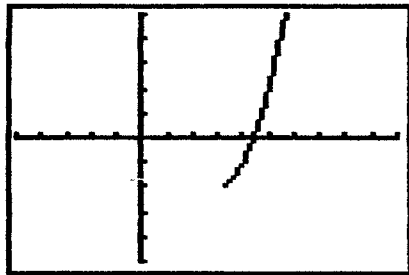
Function: Yes or No



Domain _____

Range _____

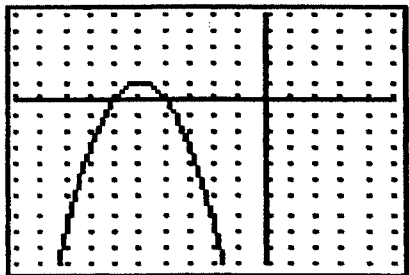
Function: Yes or No



Domain _____

Range _____

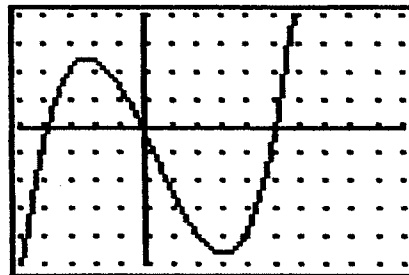
Function: Yes or No



Domain _____

Range _____

Function: Yes or No

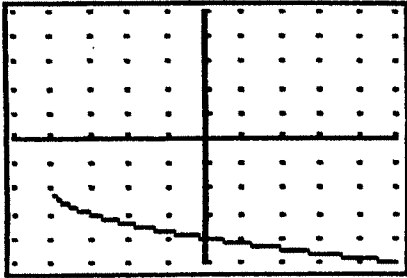


xscale:1, yscale:10

Domain _____

Range _____

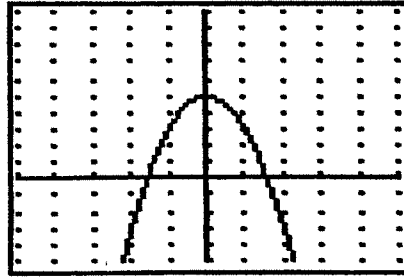
Function: Yes or No



Domain _____

Range _____

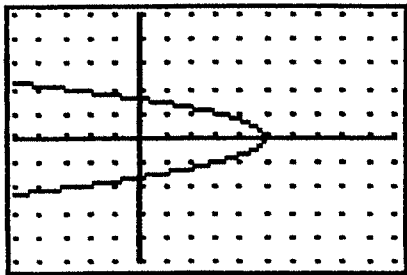
Function: Yes or No



Domain _____

Range _____

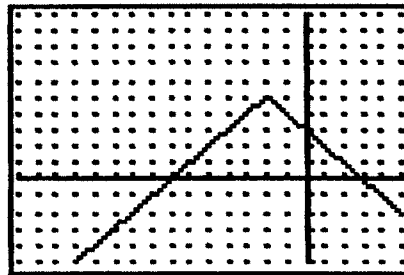
Function: Yes or No



Domain _____

Range _____

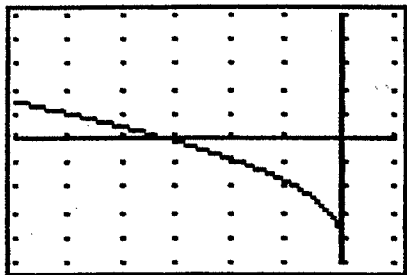
Function: Yes or No



Domain _____

Range _____

Function: Yes or No

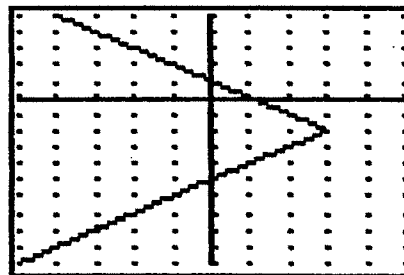


xscale:5, yscale:1

Domain _____

Range _____

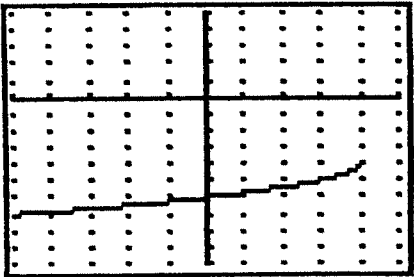
Function: Yes or No



Domain _____

Range _____

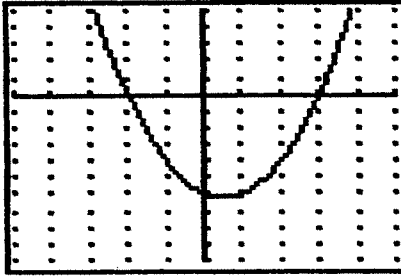
Function: Yes or No



Domain _____

Range _____

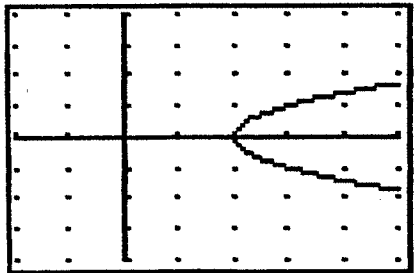
Function: Yes or No



Domain _____

Range _____

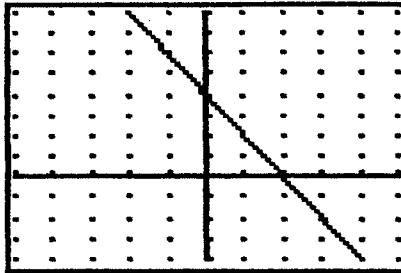
Function: Yes or No



Domain _____

Range _____

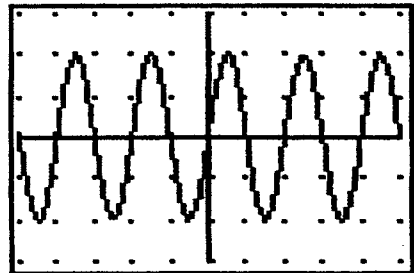
Function: Yes or No



Domain _____

Range _____

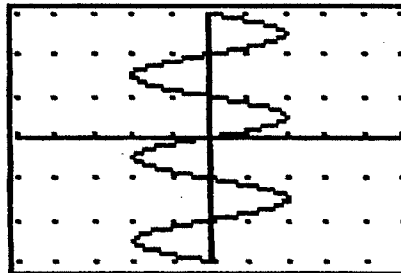
Function: Yes or No



Domain _____

Range _____

Function: Yes or No



Domain _____

Range _____

Function: Yes or No